


Name _____ Date _____ Hour _____


Show your work on a separate sheet of paper.

1. $y = -2x - 1$

x	y
-2	
0	
2	




2. $y = x + -1$




x	y
-2	
0	
2	

3. $y = 5 - x$

x	y
-2	
0	
2	



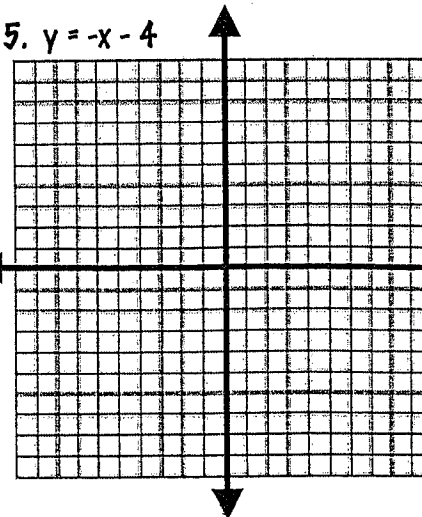
4. $y = 4$



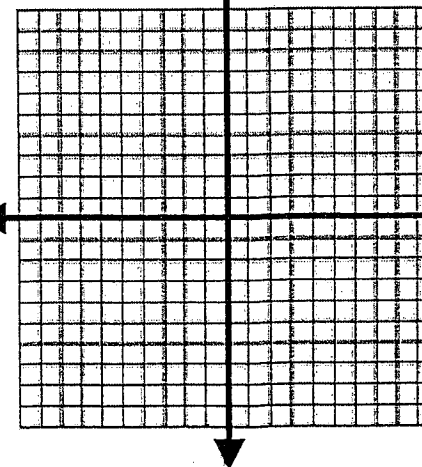
x	y
-2	
0	
2	

5. $y = -x - 4$

x	y
-2	
0	
2	



6. $x = -4$



x	y
-2	
0	
2	

